


# TEACHER'S COPY

## CAN YOU CLASSIFY THE ORGANISMS BELOW?



1




2



3



4



5



6



7



8



9



10



11



12



13



Match the picture to its classification below!

Example: 1 is a mammal

**8** is an amphibian. **7** is a fish. **10** is an arachnid.

**2** is a reptile. **6** is a bird. **9** is an insect. **11** is an annelid.

**5** is a mollusc. **12** is an echinoderm. **4** is a crustacean.

**3** is a flowering plant. **13** is a non-flowering plant.

# TEACHER'S COPY

## CAN YOU COMPLETE OUR CLASSIFICATION QUIZ?




Give 2 characteristics of and 1 example of each of these animals:

### Fish

Characteristic 1: **Fish are cold blooded**

Characteristic 2: **They have fins**

An example of a fish is: **Goldfish**



### Mollusc

Characteristic 1: **A mollusc has a soft body**

Characteristic 2: **They have a shell**

An example of a fish is: **Snail**



### Mammal

Characteristic 1: **Mammals are warm blooded**

Characteristic 2: **They have back bones**

An example of a mammal is: **Dolphin**



### Annelid

Characteristic 1: **Annelids have no legs**

Characteristic 2: **They have no hard skeleton**

An example of an annelid is: **Worm**



### Bonus question

What classification does a bumblebee belong to?

**INSECT**